






Name _____ Date _____

Spending the Winter Interpreting Pictographs

Directions: Use the following pictographs to answer the questions.

Name	Number of Snow Globes They Own
Mary	
Adam	
Nico	
Felicia	
Samuel	



= 3 snow globes






1. How many snow globes does Samuel own? _____

2. How many more snow globes does Nico have than Adam?

3. How many snow globes does Felicia own? _____

4. How many snow globes do Mary and Samuel own together?

Name _____ Date _____

Name	Number of Sledding Trips Down the Hill
Greta	
Tony	
Mica	
Bobby	
Tina	



= 4 sledding trips down the hill



= 2 sledding trips

5. How many sledding trips did Mica and Tina take down the hill altogether?

6. How many more trips down the hill did Bobby take than Greta?






7. How many more trips down the hill does Greta need to make to catch up to Tony?

8. How many sledding trips did Tony take down the hill?

Name _____ Date _____

Spending the Winter Interpreting Pictographs **Answer Key**

Directions: Use the following pictographs to answer the questions.






Name	Number of Snow Globes They Own
Mary	
Adam	
Nico	
Felicia	
Samuel	



= 3 snow globes

1. How many snow globes does Samuel own? **12**
2. How many more snow globes does Nico have than Adam?
6
3. How many snow globes does Felicia own? **15**
4. How many snow globes do Mary and Samuel own together?
18

Name _____ Date _____

Name	Number of Sledding Trips Down the Hill
Greta	
Tony	
Mica	
Bobby	
Tina	



= 4 sledding trips down the hill



= 2 sledding trips

5. How many sledding trips did Mica and Tina take down the hill altogether?

10

6. How many more trips down the hill did Bobby take than Greta?

6

7. How many more trips down the hill does Greta need to make to catch up to Tony?

8

8. How many sledding trips did Tony take down the hill?

14