

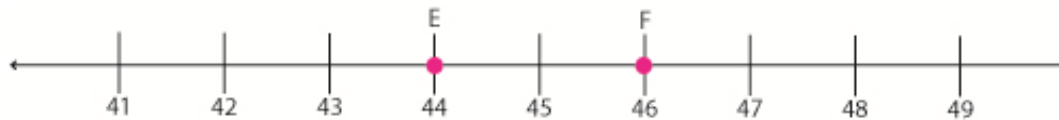
Name _____

Date _____

Finding Midpoints - Independent Practice Worksheet

Complete all the problems.

1) What is the coordinate of the midpoint of \overline{EF} ?



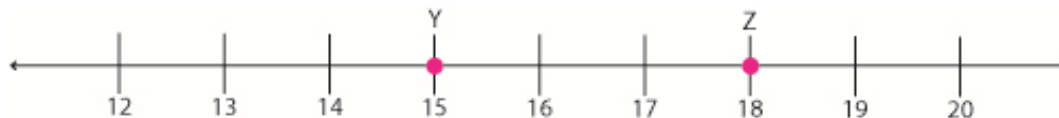
2) A (3, 8) and B (-1, -3) are the endpoints of a line segment. What is the midpoint M of that line segment?

3) What is the coordinate of the midpoint of \overline{ST} ?



4) A (-7, 7) and B (6, -4) are the endpoints of a line segment. What is the midpoint M of that line segment?

5) What is the coordinate of the midpoint of \overline{YZ} ?



6) A (6, -3) and B (-3, -7) are the endpoints of a line segment. What is the midpoint M of that line segment?



Name _____

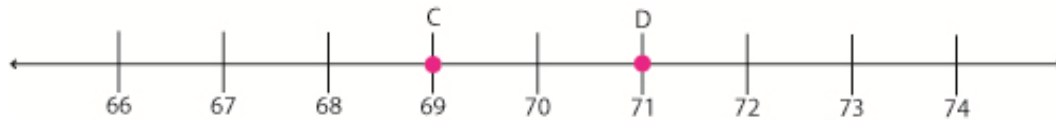
Date _____

7) What is the coordinate of the midpoint of \overline{UV} ?



8) A (3, -3) and B (-2, -5) are the endpoints of a line segment. What is the midpoint M of that line segment?

9) What is the coordinate of the midpoint of \overline{CD} ?



10) A (4, -1) and B (7, -6) are the endpoints of a line segment. What is the midpoint M of that line segment?

