


Decomposing Three-Dimensional Figures - Matching Worksheet

Match the word problems to their answers. Write the letter of the answer that matches the problem.

_____ 1. If you were to view the shape from the right, what would you see?



a. circle

_____ 2. View the shape from the top and identify what you would see.




b. b

_____ 3. If you were to view the shape from the bottom, what would you see?




c. rectangle

_____ 4. Look at this object from the left, what will you see?

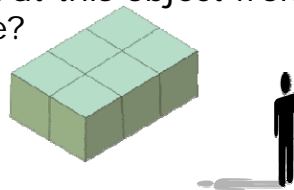


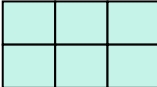
a 

b 

d. a

_____ 5. Look at this object from the top, what will you see?



a 

b 

e. triangle

