


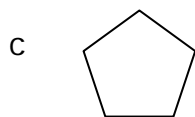
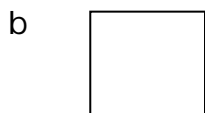
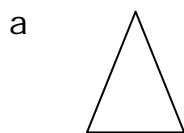
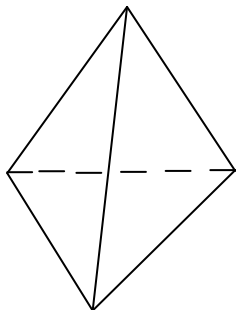
Name _____

Date _____

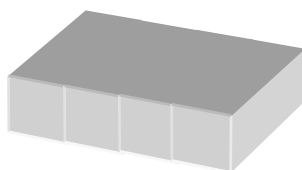
Decomposing Three-Dimensional Figures - Guided Lesson

Complete the following problems:

1) Look at this figure below. If you see this shape from the left, what would you see?



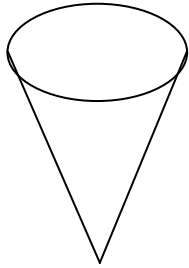
2) If you were to look at this object from the side, what will you see?



Name _____

Date _____

3) Look at this figure:



If you see this shape from the top, based on its current position, what would you see?

