

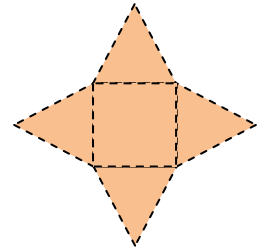
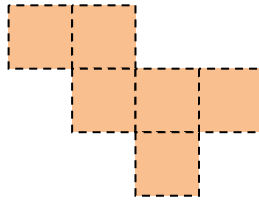
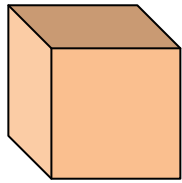
Name _____

Date _____

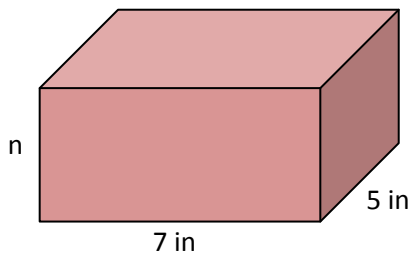
Using Nets to Understand 3-D Figures - Guided Lesson

Complete the following problems:

1) Which net will make this figure?



2) What is the volume?



Surface area = 142 square inches

3) What shape will this net make?

