

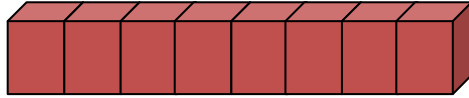
Name _____

Date _____

The Volume of Solid Figures - Guided Lesson

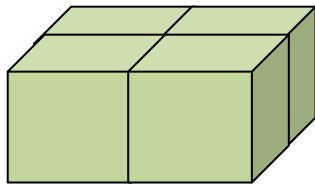
Complete the following questions.

1) Choose the correct volume of the object in cubic units.

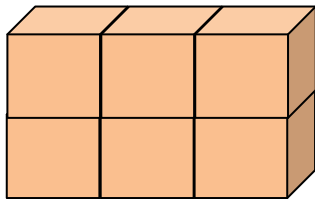


- a. 8
- b. 16
- c. 7
- d. 9

2) What is the volume of this object?



3) Write true or false to make the sentences correct.



1. The object has 9 cubic units. _____
2. The object has 6 cubic units. _____

