

Lines of Symmetry in Two-dimensional Figures - Independent Practice Worksheet

Complete all the problems. Select the right one.

1. Which dotted line is a line of symmetry?



a.



b.




c.



d.

2. Which dotted line is a line of symmetry?



a.



b.

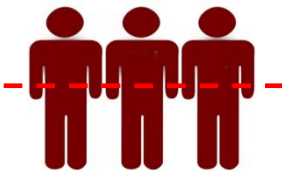


c.

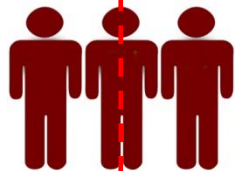


d.


3. Which dotted line is a line of symmetry?




a.



b.

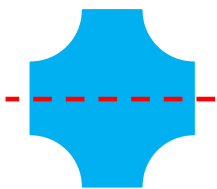


c.

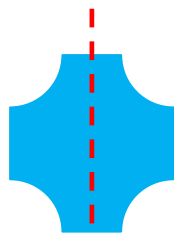


d.

4. Which dotted line is not a line of symmetry?



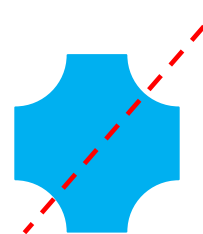
a.



b.



c.




d.



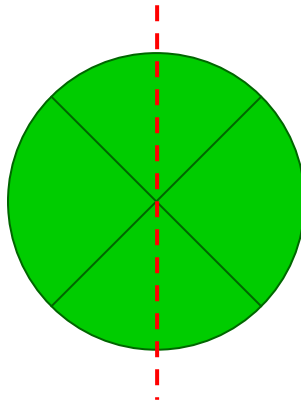
Name _____

Date _____


5. Is the dotted line a line of symmetry?




6. Is the dotted line a line of symmetry?



7. Is the dotted line a line of symmetry?




8. Is the dotted line a line of symmetry?




Name _____

Date _____


9. Draw a vertical line of symmetry in the shape below.



10. Draw a vertical line of symmetry in the shape below.



11. Draw a horizontal line of symmetry in the shape below.



12. Draw a horizontal line of symmetry in the shape below.

