

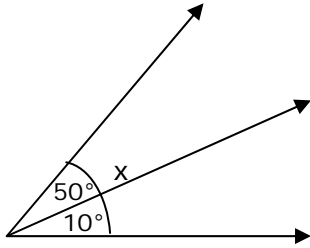
Name _____

Date _____

Adding Angles of Measure - Matching Worksheet

Match the following.

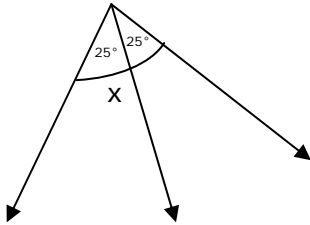
1.



a.

110°

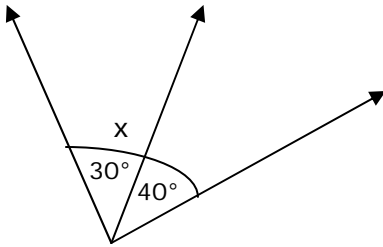
2.



b.

70°

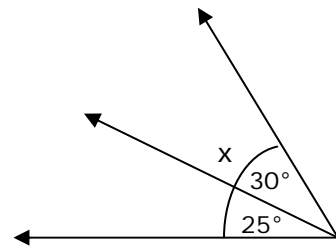
3.



c.

60°

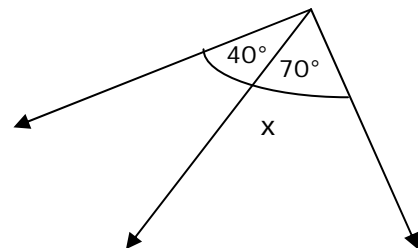
4.



d.

50°

5.



e.

55°

