


Name: _____

Date _____

Visual Multiplication Independent Practice Worksheet


Solve the following.

1



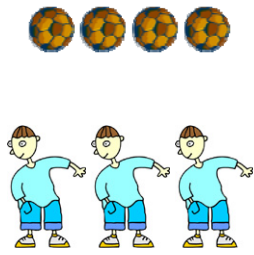
Each thief wants to reach each bag. Draw a line from each thief to each bag. How many lines did you draw?

2




Each girl wants to reach each comb. Draw a line from each girl to each comb. How many lines did you draw?

3




Each boy wants to reach each football. Draw a line from each boy to each football. How many lines did you draw?

4




Each girl wants to reach each purse. Draw a line from each girl to each purse. How many lines did you draw?

5



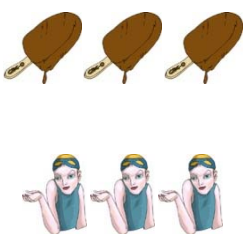
Each king wants to reach each crown. Draw a line from each king to each crown. How many lines did you draw?

6



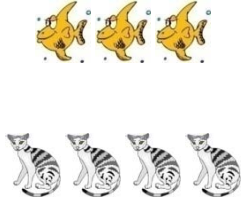
Each honeybee wants to reach each jar. Draw a line from each honeybee to each jar. How many lines did you draw?

7



Each lady wants to reach each ice cream. Draw a line from each lady to each ice cream. How many lines did you draw?

8



Each cat wants to reach each fish. Draw a line from each cat to each fish. How many lines did you draw?

