



Name: _____


Date _____


Topic: Line Symmetry- Worksheet 1


1.  *Horizontal* 2.
Vertical 2.
Both 2.
None 2.

2.  *Horizontal* 2.
Vertical 2.
Both 2.
None 2.

3.  *Horizontal* 2.
Vertical 2.
Both 2.
None 2.

4.  *Horizontal* 2.
Vertical 2.
Both 2.
None 2.

5.  *Horizontal* 2.
Vertical 2.
Both 2.
None 2.

6.  *Horizontal* 2.
Vertical 2.
Both 2.
None 2.



Name: _____


Date _____

7.



- Horizontal 2.
- Vertical 2.
- Both 2.
- None 2.

8.



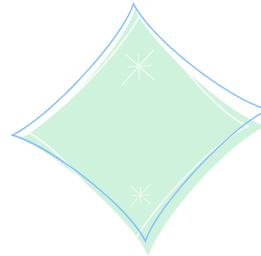
- Horizontal 2.
- Vertical 2.
- Both 2.
- None 2.

9.



- Horizontal 2.
- Vertical 2.
- Both 2.
- None 2.

10.




- Horizontal 2.
- Vertical 2.
- Both 2.
- None 2.




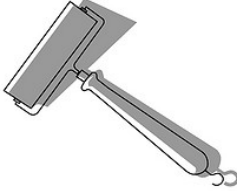
Name: _____


Date _____


Topic: Line Symmetry- Worksheet 2


1.  *Horizontal* 2.
Vertical 2.
Both 2.
None 2.

2.  *Horizontal* 2.
Vertical 2.
Both 2.
None 2.

3.  *Horizontal* 2.
Vertical 2.
Both 2.
None 2.

4.  *Horizontal* 2.
Vertical 2.
Both 2.
None 2.

5.  *Horizontal* 2.
Vertical 2.
Both 2.
None 2.

6.  *Horizontal* 2.
Vertical 2.
Both 2.
None 2.



Name: _____

Date _____

7.



Horizontal 2.

Vertical 2.

Both 2.

None 2.

8.



Horizontal 2.

Vertical 2.

Both 2.

None 2.

9.



Horizontal 2.

Vertical 2.

Both 2.

None 2.

10.



Horizontal 2.

Vertical 2.

Both 2.


None 2.




Name: _____

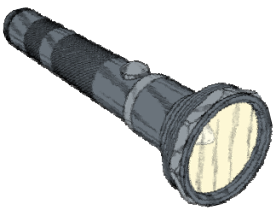
Date _____


Topic: Line Symmetry- Worksheet 3


1.  *Horizontal* 2.
Vertical 2.
Both 2.
None 2.

2.  *Horizontal* 2.
Vertical 2.
Both 2.
None 2.

3.  *Horizontal* 2.
Vertical 2.
Both 2.
None 2.

4.  *Horizontal* 2.
Vertical 2.
Both 2.
None 2.

5.  *Horizontal* 2.
Vertical 2.
Both 2.
None 2.

6.  *Horizontal* 2.
Vertical 2.
Both 2.
None 2.



Name: _____


Date _____

7.



- Horizontal 2.
- Vertical 2.
- Both 2.
- None 2.

8.



- Horizontal 2.
- Vertical 2.
- Both 2.
- None 2.

9.



- Horizontal 2.
- Vertical 2.
- Both 2.
- None 2.

10.



- Horizontal 2.
- Vertical 2.
- Both 2.
- None 2.



Name: _____

Date _____

Topic: Line Symmetry- Worksheet 4

1.



- Horizontal 2.
- Vertical 2.
- Both 2.
- None 2.

2.



- Horizontal 2.
- Vertical 2.
- Both 2.
- None 2.

3.



- Horizontal 2.
- Vertical 2.
- Both 2.
- None 2.

4.



- Horizontal 2.
- Vertical 2.
- Both 2.
- None 2.

5.



- Horizontal 2.
- Vertical 2.
- Both 2.
- None 2.

6.



- Horizontal 2.
- Vertical 2.
- Both 2.
- None 2.



Name: _____


Date _____

7.




- Horizontal 2.
- Vertical 2.
- Both 2.
- None 2.

8.



- Horizontal 2.
- Vertical 2.
- Both 2.
- None 2.

9.



- Horizontal 2.
- Vertical 2.
- Both 2.
- None 2.

10.




- Horizontal 2.
- Vertical 2.
- Both 2.
- None 2.





Name: _____


Date _____

Topic: Line Symmetry- Worksheet 5


1.  *Horizontal* 2.
Vertical 2.
Both 2.
None 2.

2.  *Horizontal* 2.
Vertical 2.
Both 2.
None 2.

3.  *Horizontal* 2.
Vertical 2.
Both 2.
None 2.

4.  *Horizontal* 2.
Vertical 2.
Both 2.
None 2.

5.  *Horizontal* 2.
Vertical 2.
Both 2.
None 2.


6.  *Horizontal* 2.
Vertical 2.
Both 2.
None 2.



Name: _____

Date _____

7.




- Horizontal 2.
- Vertical 2.
- Both 2.
- None 2.

8.



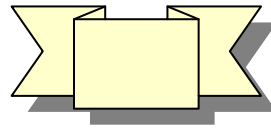
- Horizontal 2.
- Vertical 2.
- Both 2.
- None 2.

9.



- Horizontal 2.
- Vertical 2.
- Both 2.
- None 2.

10.



- Horizontal 2.
- Vertical 2.
- Both 2.
- None 2.

