

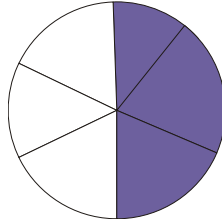
Name _____

Date _____

Comparing Like Fractions- Matching Worksheet

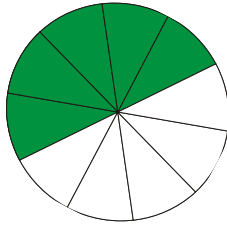
Write the letter of the fraction that matches the pie figure.

_____ 1.



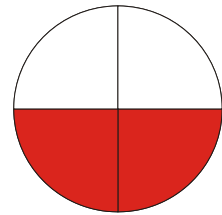
a. $\frac{6}{7}$

_____ 2.



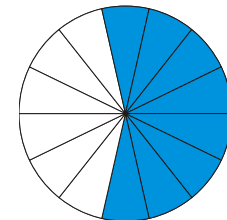
b. $\frac{3}{6}$

_____ 3.



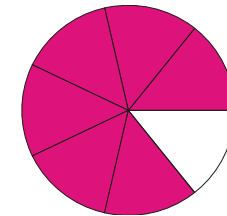
c. $\frac{8}{14}$

_____ 4.



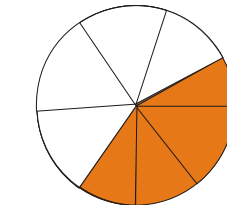
d. $\frac{4}{8}$

_____ 5.



e. $\frac{5}{10}$

_____ 6.



f. $\frac{2}{4}$

