

Name _____

Date _____

Properties Of Operations as Strategies - Guided Lesson

1.) Complete the following problems:

Use the zero property of multiplication to solve:




$$5 \times 0 = \underline{\quad}$$



$$\times 0 = \underline{\quad}$$


2.) $24 \div 8 = 3$

Write a related multiplication fact.



3.) Use the identity property of multiplication.

$$4 \times 1 = \underline{\quad}$$



$$\times 1 =$$

