

Name \_\_\_\_\_

Date \_\_\_\_\_

### Recognize Area Word Problems - Matching Worksheet

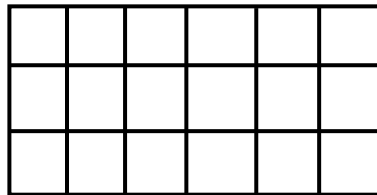
What is the area of the rectangle below? Write the letter of the answer that matches the problem.

\_\_\_\_\_ 1.



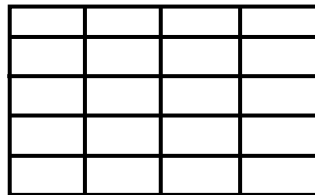
a. 30

\_\_\_\_\_ 2.



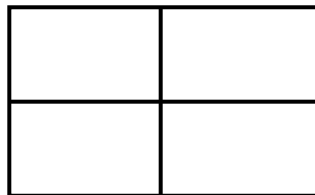
b. 20

\_\_\_\_\_ 3.



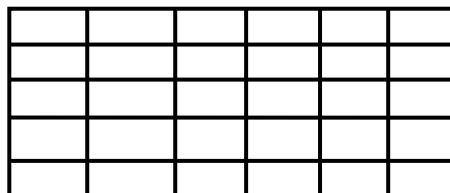
c. 18

\_\_\_\_\_ 4.



d. 4

\_\_\_\_\_ 5.



e. 6

