


Name _____

Date _____

Express Whole Numbers as Fractions – Independent Practice 1


Write the shaded portion of the shapes as a fraction.

1.



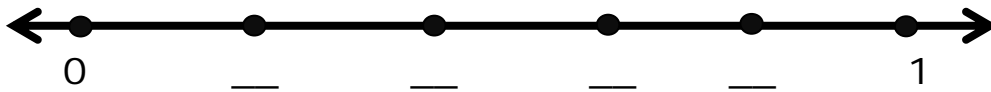
Fraction: _____

2.



Fraction: _____

3. Label all the points (as fractions) on the number line.



4. What whole number is $\frac{7}{7}$ equal to? _____

5. What is 8 in fraction form? _____

6. A pizza has 8 slices.

Color 1 whole pizza.

