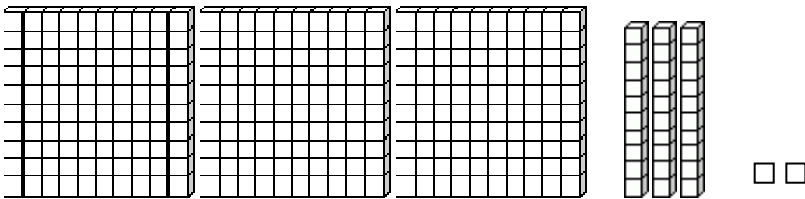


## The Hundreds Place - Step-by-Step Lesson

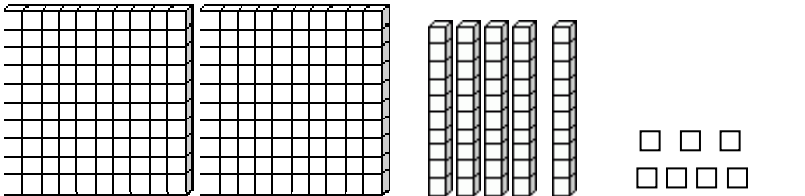
### Lesson 1 Three-digit number

1.) Which place value model shows 257?

**A**



**B**



#### Explanation:

Looking at the number 257:

The last or right digit is the ones place which is 7.




The second digit is the tens place which is 5.

The first digit from the left is called the hundreds' place. It tells you how many

sets of one hundred are in the number. There are 2 sets of 100.

The number 257 had two hundreds, five tens, and seven ones.

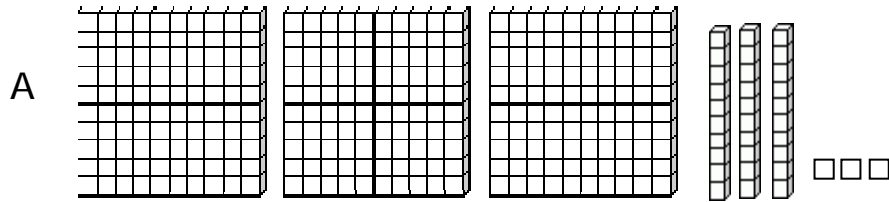
We will now look at the models and see what each represents.

 = 1 Hundreds place     
  = 1 Tens place     
  = 1 ones place

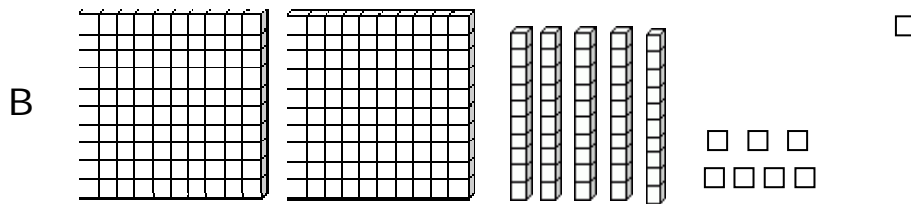

Name \_\_\_\_\_

Date \_\_\_\_\_

Let's look at the models now:



This model has 3 hundreds, 3 tens and 3 ones. It shows 333.



This model has 2 hundreds, 5 tens and 7 ones. It shows 257.

B is the right answer.

