

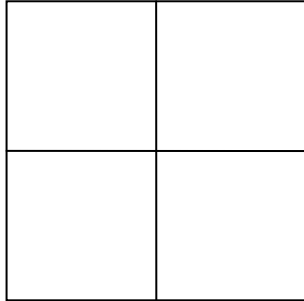
Name \_\_\_\_\_

Date \_\_\_\_\_

**Partition Circles and Rectangles - Guided Lesson**

Complete the following problems.

1.) The shape below has been broken into parts. Label the shape as being broken into halves, thirds, or fourths.



\_\_\_\_\_

2.) Tell how many parts each shape is broken into. Label the parts equal or unequal.

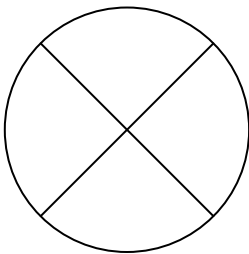


Fig. a

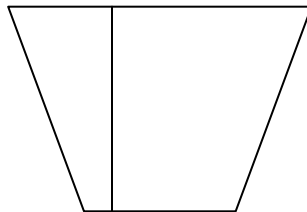


Fig. b




Fig. c

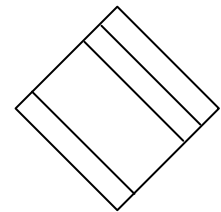
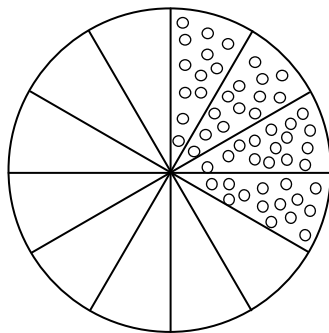


Fig. d

3.) What fraction of the shape which is filled?



4/12

8/12

5/10

4/15

