

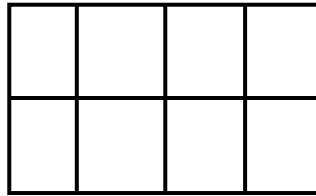
Name \_\_\_\_\_

Date \_\_\_\_\_

## The Area of Rectangles - Matching Worksheet

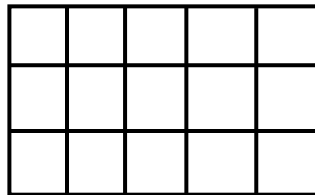
What is the area of the rectangle below? Write the letter of the answer that matches the problem.

\_\_\_\_\_ 1.



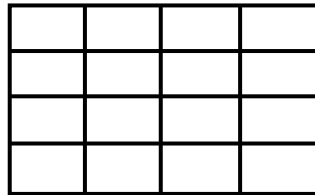
a. 16

\_\_\_\_\_ 2.




b. 8

\_\_\_\_\_ 3.



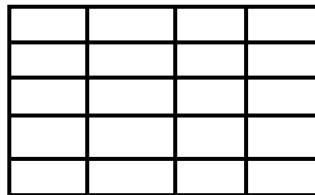
c. 20

\_\_\_\_\_ 4.



d. 15

\_\_\_\_\_ 5.



e. 6

