


Name _____

Date _____

Recognize and Draw Shapes - Guided Lesson


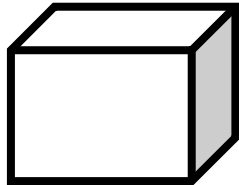
Complete the following problems:

1) What is the name of this type of figure?



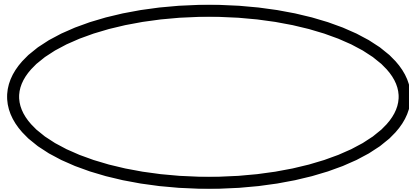
- a) circle b) pentagon c) rhombus d) parallelogram

2)



How many sides does each figure have?

3) What is the name of this type of figure?



- a) square b) oval c) triangle d) trapezoid

