

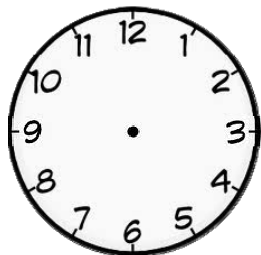
Name _____

Date _____

Time from analog and digital clocks - Independent Practice Worksheet


Draw hands on analog clock and write numbers on digital clock to show the given time. Be sure the hour hands are shorter than the minute hands.

1




3:20

6




8:00

2




7:50

7



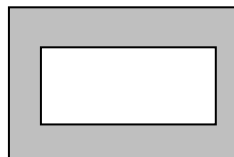
4:30

3



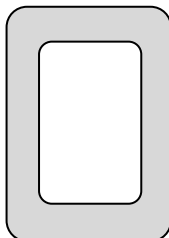
9:35

8



2:10

4



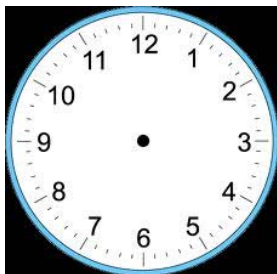
1:10

9




12:00

5



6:55

10



10:40

