

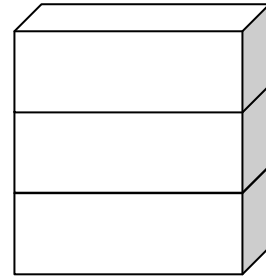
Name _____

Date _____

Topic: Picture-based Measurement: Worksheet 1

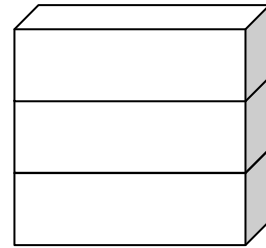
The girl is _____ cubes tall.

1.



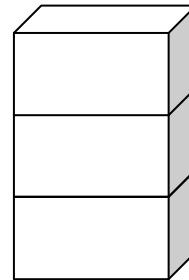
The robot is _____ cubes tall.

2.



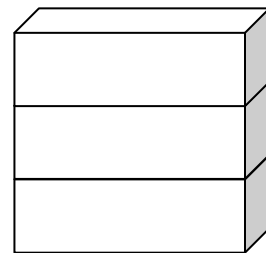
The duck is _____ cubes tall.

3.



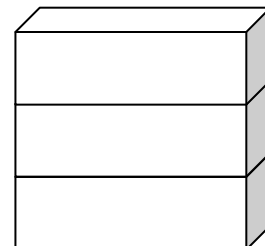
The tree is _____ cubes tall.

4.



The glass is _____ cubes tall.

5.

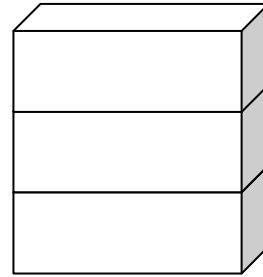


Name _____

Date _____

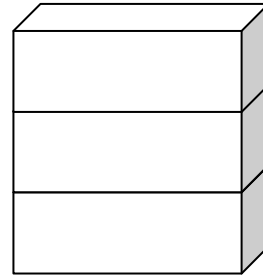

The soldier is _____ cubes tall.

6.



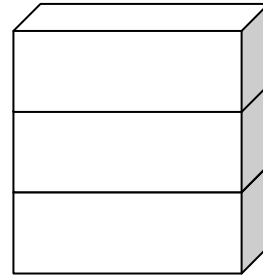

The giraffe is _____ cubes tall.

7



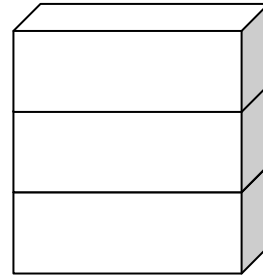
The toy is _____ cubes tall.

8.



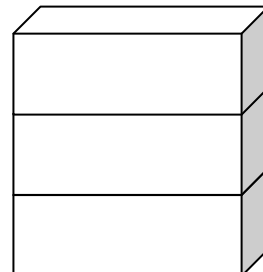
The cat is _____ cubes tall.

9.



The ship is _____ cubes tall

10.



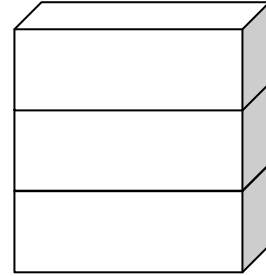
Name _____

Date _____

Topic: Picture-based Measurement: Worksheet 2

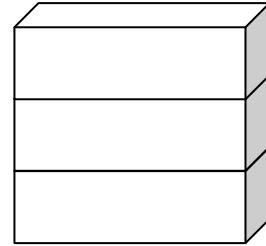
The duck is _____ cubes tall.

1.



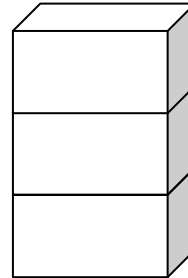
The peacock is _____ cubes tall.

2.



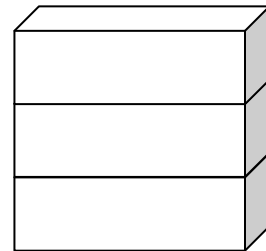
The sparrow is _____ cubes tall.

3.



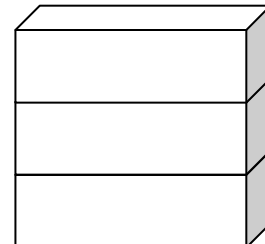
The clock is _____ cubes tall.

4.



The man is _____ cubes tall.

5.

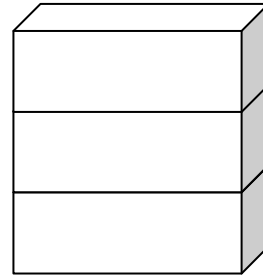


Name _____

Date _____

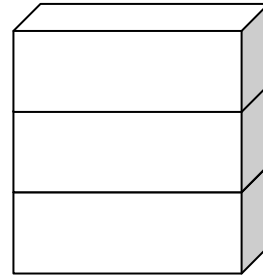
The girl is _____ cubes tall.

6.



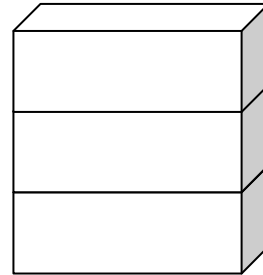

The woman is _____ cubes tall.

7.



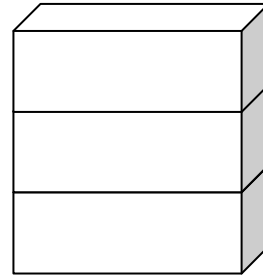

The crocodile is _____ cubes tall.

8.



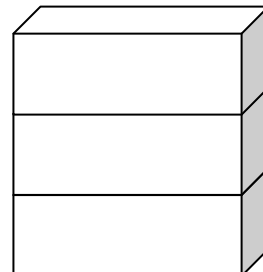
The fish is _____ cubes tall.

9.



The toy is _____ cubes tall

10.



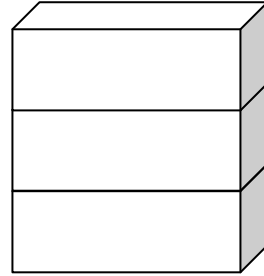

Name _____

Date _____

Topic: Picture-based Measurement: Worksheet 3

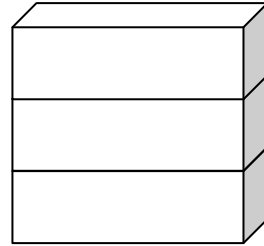
The ant is _____ cubes tall.

1.



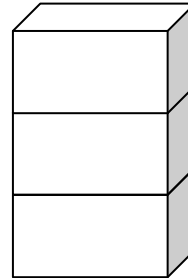
The duck is _____ cubes tall.

2.



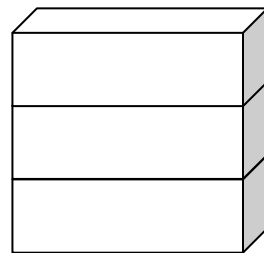
The dog is _____ cubes tall.

3.



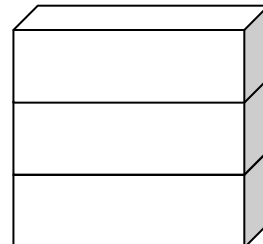
The mouse is _____ cubes tall.

4.



The monkey is _____ cubes tall.

5.

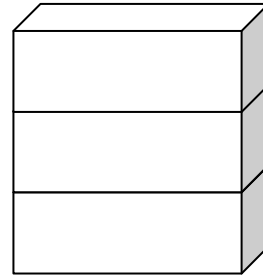



Name _____

Date _____

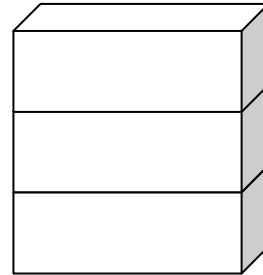
The banana is _____ cubes tall.

6.



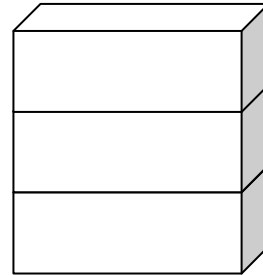

The boy is _____ cubes tall.

7.



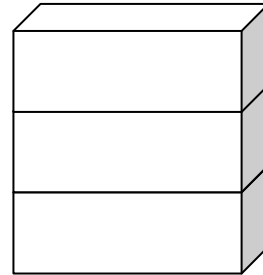

The grapes are _____ cubes tall.

8.



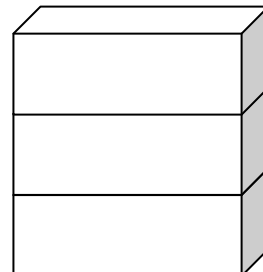
The boat is _____ cubes tall.

9.



The bear is _____ cubes tall

10.



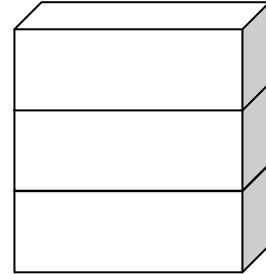
Name _____

Date _____

Topic: Picture-based Measurement: Worksheet 4

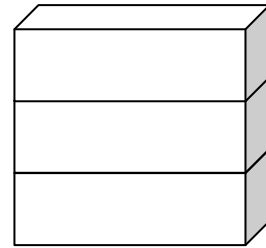
The frog is _____ cubes tall.

1.



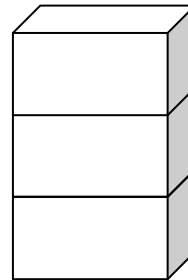
The bee is _____ cubes tall.

2.



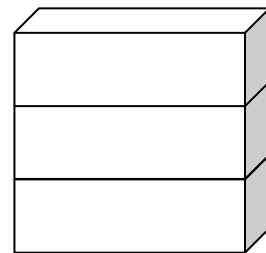
The dog is _____ cubes tall.

3.



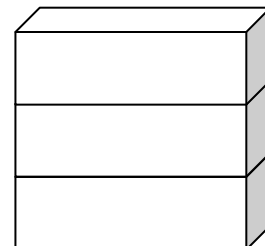
The tiger is _____ cubes tall.

4.



The parrot is _____ cubes tall.

5.

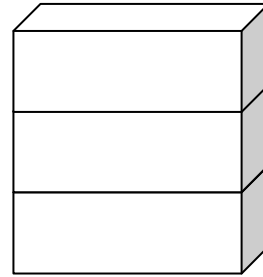


Name _____

Date _____

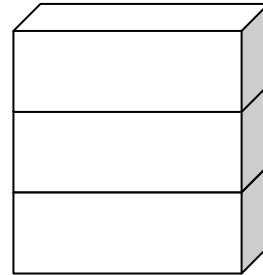
The chicken is _____ cubes tall.

6.



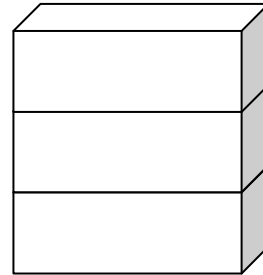
The crow is _____ cubes tall.

7.



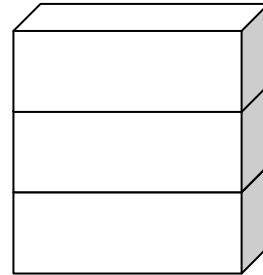
The cow is _____ cubes tall.

8.



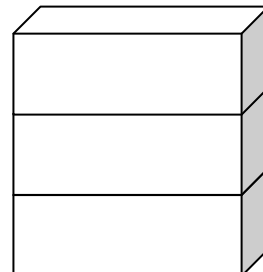
The sheep is _____ cubes tall.

9.



The rabbit is _____ cubes tall

10.



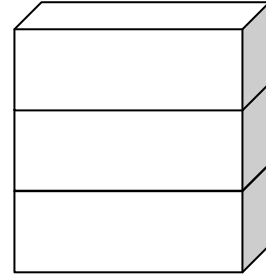

Name _____

Date _____

Topic: Picture-based Measurement: Worksheet 5

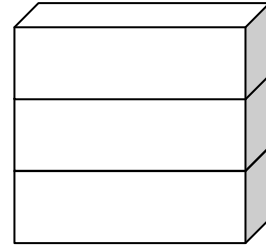
The rat is _____ cubes tall.

1.



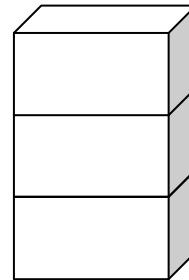
The horse is _____ cubes tall.

2.



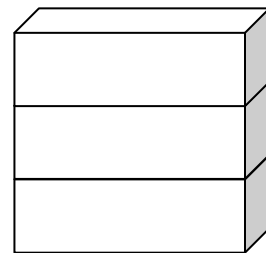
The lion is _____ cubes tall.

3.



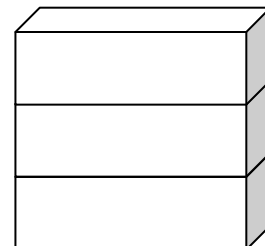

The dog is _____ cubes tall.

4.



The bug is _____ cubes tall.

5.

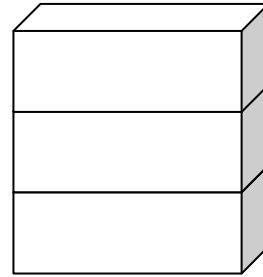


Name _____

Date _____

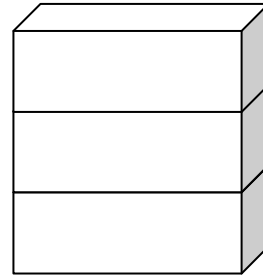
The deer is _____ cubes tall.

6.



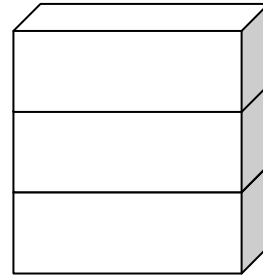
The fish is _____ cubes tall.

7.



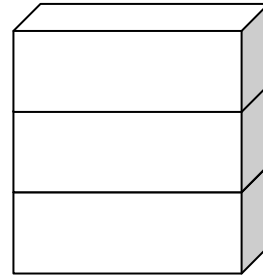
The butterfly is _____ cubes tall.

8.



The elephant is _____ cubes tall.

9.



The donkey is _____ cubes tall

10.

