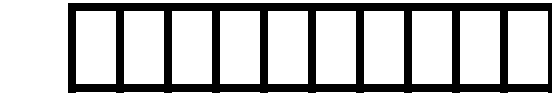


Name \_\_\_\_\_

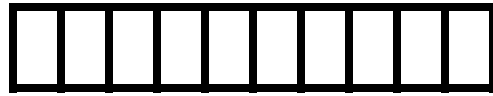
Date \_\_\_\_\_

### How Long Are You? Worksheet

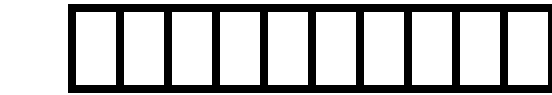
Color the blocks fully to measure the length of the objects. Fill in the blanks.




This pillar is \_\_\_\_\_ blocks long.



This racket is \_\_\_\_\_ blocks long.



This brush is \_\_\_\_\_ blocks long.



This comb is \_\_\_\_\_ blocks long.



This brush is \_\_\_\_\_ blocks long.



This scooter is \_\_\_\_\_ blocks long.



This plane is \_\_\_\_\_ blocks long.



This plane is \_\_\_\_\_ blocks long.



This van is \_\_\_\_\_ blocks long.



This gum is \_\_\_\_\_ blocks long.

