


Name _____

Date _____


Ten More Or Ten Less - Guided Lesson

Complete the following: -


1. Draw 10 more apples on the second tree and write the number.




2 apples



2. Draw 10 less flowers than the given flower in the second box and write the number.



16 flowers





Name _____

Date _____

3. Write the missing 3 numbers. Each number is 10 more than previous number from left to right.

a. 24 _____ _____ _____

b. _____ _____ _____ 88

c. _____ _____ _____ 73

d. 57 _____ _____ _____

