

Name _____


Date _____

Subtraction and Unknown Addends (to 20)- Matching Worksheet

Match the following with the pictures.


1. $2 + \underline{\quad} = 4$

A



2. $4 + \underline{\quad} = 7$

B



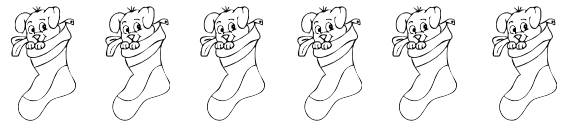
3. $\underline{\quad} + 9 = 10$

C



4. $\underline{\quad} + 4 = 8$

D



5. $\underline{\quad} + 5 = 10$

E



6. $\underline{\quad} + 3 = 9$

f

